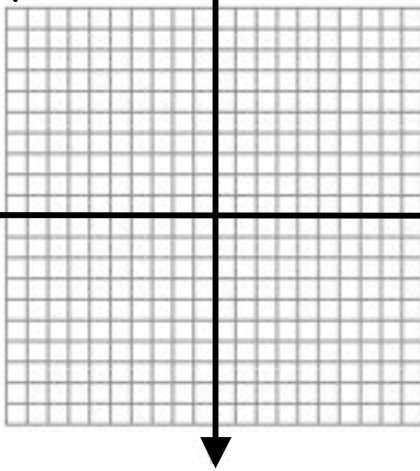


Name _____ Date _____ Hour _____

Show your work on a separate sheet of paper.

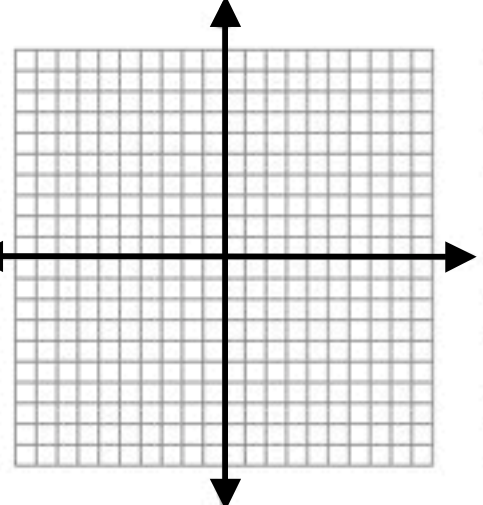
1. $y = x - 3$

x	y
-2	
0	
2	



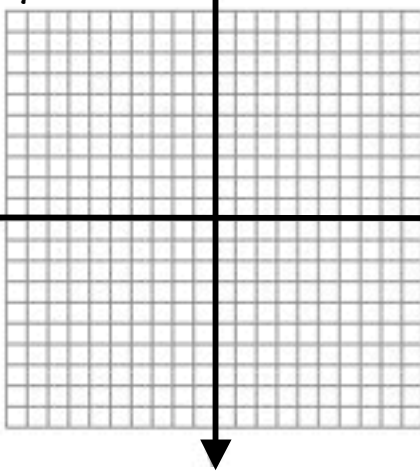
2. $y = 9$

x	y



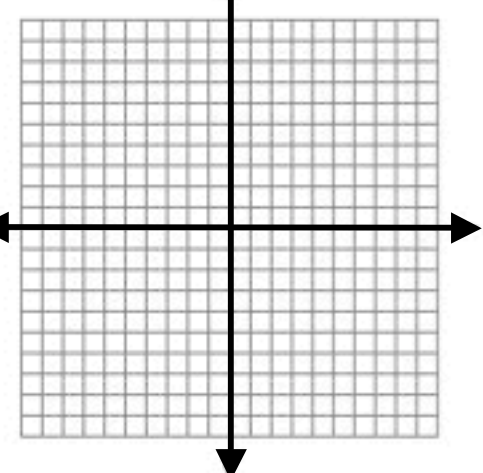
3. $y = -4x$

x	y
-2	
0	
2	



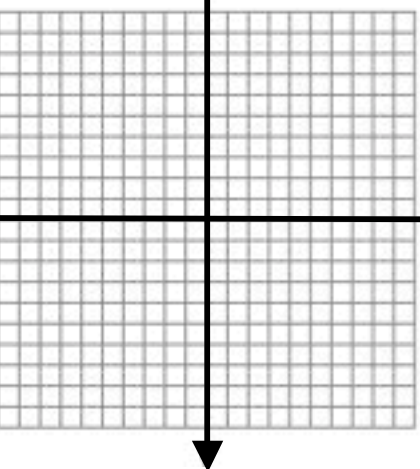
4. $y = -2x - 4$

x	y
-2	
0	
2	



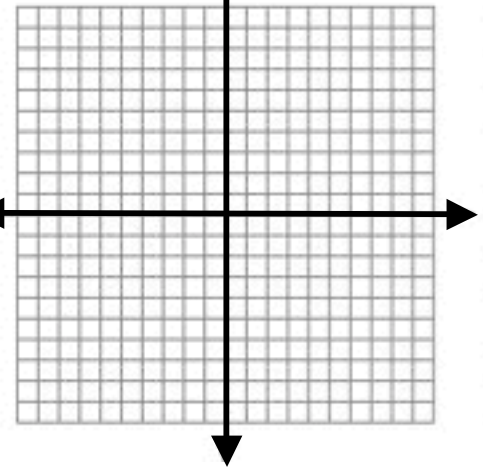
5. $x = -1$

x	y



6. $y = \frac{1}{2}x + 4$

x	y
-2	
0	
2	




Name _____ Date _____ Hour _____

Show your work on a separate sheet of paper.


7. $y = -3x$

x	y
-2	
0	
2	



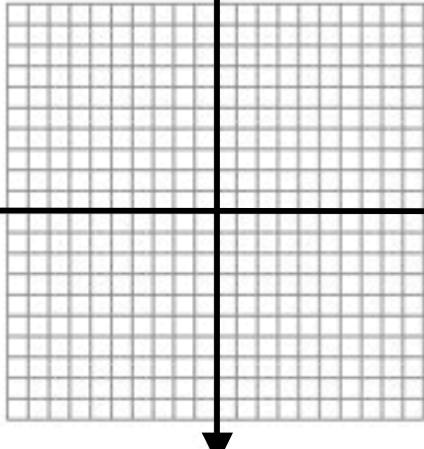
8. $x = 10$

x	y



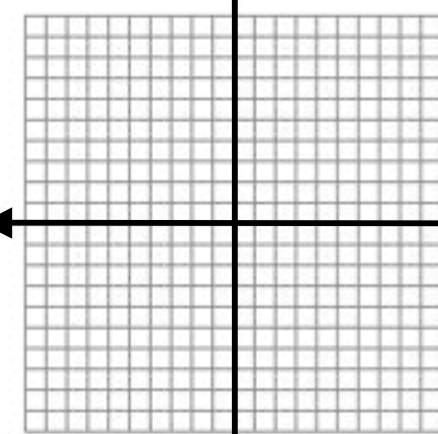
9. $y = x + 6$

x	y
-2	
0	
2	



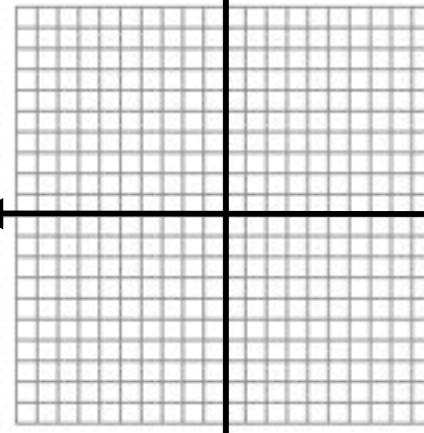
10. $y = \frac{-3}{2}x + 8$

x	y
-2	
0	
2	



11. $y = 4$

x	y



12. $y = 5 - x$

x	y
-2	
0	
2	

